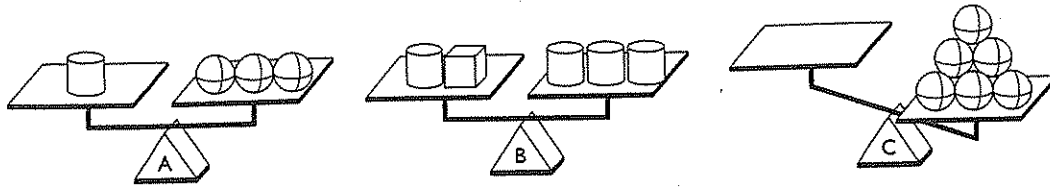


Name

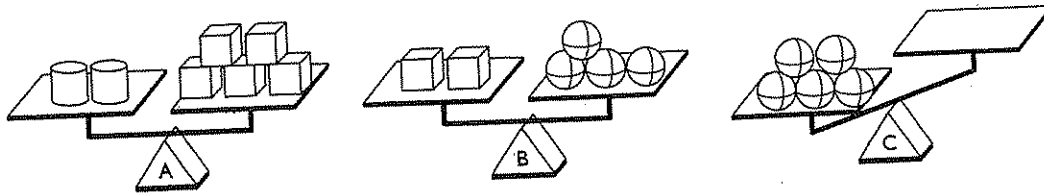
Balance Challenge 1



- 1 Which block, a sphere, cylinder, or cube, will balance Scale C? _____
- 2 Tell how you chose the block.

Name

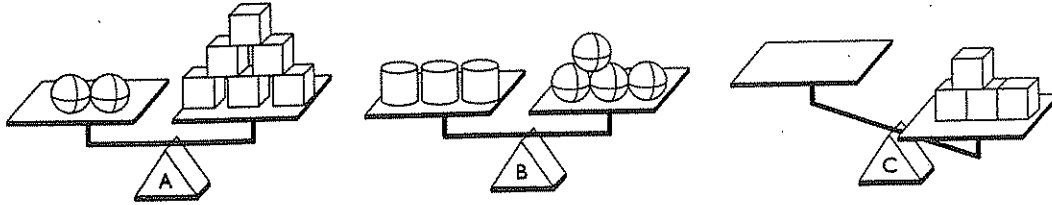
Balance Challenge 2



- 1 Which block, a sphere, cylinder, or cube, will balance Scale C? _____
- 2 List the steps you followed to find your answer.

Name

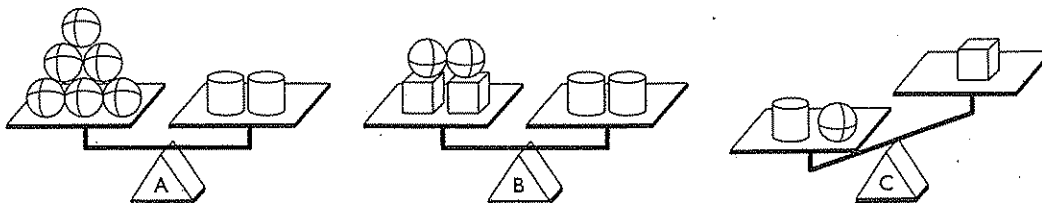
Balance Challenge 3



- 1 Which block, a sphere, cylinder, or cube, will balance Scale C? _____
- 2 List the steps you followed to find your answer.

Name

Balance Challenge 4



- 1 Which block, a cube, cylinder, or sphere will balance Scale C? _____
- 2 Write the steps you followed to solve the problem.